

5TH GRADE FAMILY CHOICE BOARD



MORPHOLOGY

GREEK ROOT

TELE = FAR OFF; DISTANT

LATIN ROOT

SCRIB = WRITE

THINK OF AS MANY WORDS AS YOU

CAN THAT HAVE THIS ROOT

EX: TELESCOPE

FLUENCY

READ THE POEM ONLINE

A CAT'S MIDNIGHT

BATTLE

READ THE POEM ALOUD TO

FAMILY MEMBERS.

VOCABULARY

LISTEN TO

"I AM THANKFUL"

LINKED [HERE](#)

LISTEN FOR

INTERESTING WORDS

EX:

RECIPE

FIND 2 MORE!



COMPREHENSION

READ THE PASSAGE

"GIVING THANKS AROUND THE
WORLD"

WHAT IS THE MAIN IDEA OF THE
ARTICLE?

WHAT IS ONE THING IN COMMON
THAT ALL THESE THANKSGIVING
TRADITIONS HAVE?

RESEARCH


NOVEMBER 4, 1922

KING TUT'S TOMB WAS DISCOVERED

NOVEMBER 6, 1860

ABRAHAM LINCOLN WAS ELECTED
PRESIDENT.

RESEARCH AT THE
LIBRARY OR ONLINE
ABOUT KING TUT OR ABRAHAM
LINCOLN



NOVEMBER

5TH GRADE FAMILY CHOICE BOARD

MATH GAMES

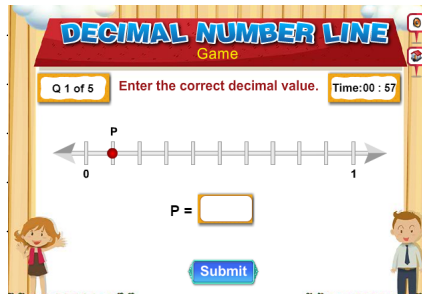
PLACE VALUE

YOU NEED A SET OF PLAYING CARDS (REMOVE 10S, JACKS, QUEENS & KINGS) AND A ROUND OBJECT.



DEAL EACH PLAYER 3 CARDS. PLAYERS USE THE CARDS TO CREATE THE LARGEST 3-DIGIT NUMBER POSSIBLE. PLAYERS SHOW THEIR CARDS AND THE ONE WITH THE GREATEST NUMBER TAKES ALL THE CARDS.

PLAY [THIS GAME](#) ONLINE TO PRACTICE IDENTIFYING DECIMALS ON A NUMBER LINE.



PROBLEM SOLVING

KRISTIN DRINKS 0.5 LITERS OF ORANGE JUICE WITH BREAKFAST EACH DAY.

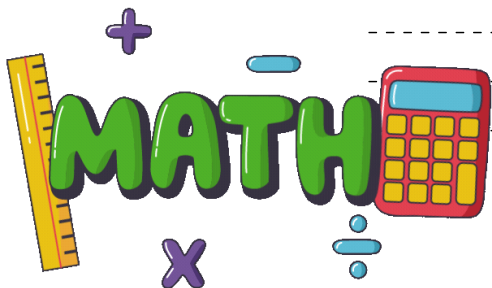
HOW MANY LITERS OF ORANGE JUICE DOES KRISTIN DRINK IN 15 DAYS?

NUMBER EQUATIONS

$$754 \div 13 =$$

$$1,426 \div 46 =$$

$$21.6 \div 4 =$$



MATH AROUND US

LOOK AT THIS BOX OF PENCILS.



YOUR TEACHER TAKES THIS BOX OF PENCILS AND PUTS THEM INTO 12 GROUPS OF 15 PENCILS. HOW MANY PENCILS ARE IN THE BOX?



NOVEMBER