



# Math Virtual Learning

# 2nd grade Time

April 8, 2020



2nd Grade Math  
Lesson: April 8, 2020

**Learning Target:**

Students will tell and write time to the nearest 5 minutes

## **Background: This is a 2nd grade lesson**

- Students have reviewed the types of clocks
- Students have reviewed how to tell time

## **Let's Get Started:**

### Watch Videos:

1. [Telling time to 5 minutes](#)
2. [Telling Time with Skip Counting by 5 Minutes](#)

# Practice #1:

## What time does the clock show?

Think back to the video.

- The **red** hand tells us the hour.
- The **blue** hand tells the minutes.



1:20

3:30

4:05

# Answer #1:

## What time does the clock show?

Think back to the video.

- The **red** hand tells us the hour.
- The **blue** hand tells the minutes.



1:20

3:30

4:05



## Practice #2:

What time does the clock show?

Think back to the video.

- The **red** hand tells us the hour.
- The **blue** hand tells the minutes.



11:50

10:55

3:00

## Answer #2:

What time does the clock show?

Think back to the video.

- The **red** hand tells us the hour.
- The **blue** hand tells the minutes.



11:50



10:55


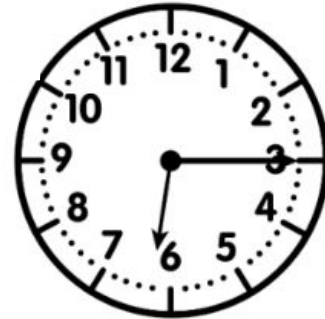

3:00

## Practice #3:

Can you match the digital clock to the correct analog clock?

Think back to the video.

- The **short** hand tells us the hour.
- The **long** hand tells the minutes.




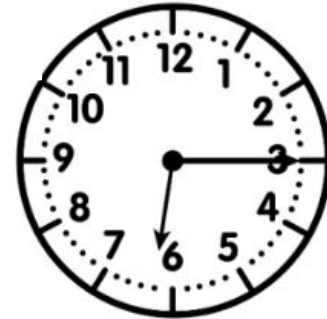



### Answer #3:

Can you match the digital clock to the correct analog clock?

Think back to the video.

- The **short** hand tells us the hour.
- The **long** hand tells the minutes.

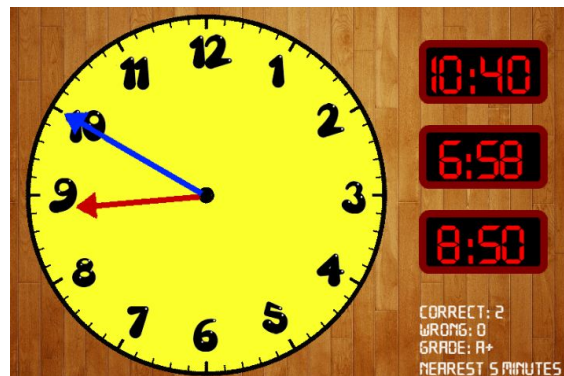


# Practice on your own:

Go to this website:

[Time Teller](#)

1. Select either computer or tablet.
2. Then choose NEAREST 5 MINUTES.
3. Wait for the hands to stop moving. Then select the time.
4. Look in the bottom right corner to see how you are doing.



# MORE Practice on your own:

Go to this website: [Clockworks](https://www.clockworks.com)

1. Select PLAY, then START - start with BASIC level - you can work your way to higher levels.
2. Drag the hour(green) and minute (red) to set the clock.



**MORE Practice on your own:**  
Go to this website: [Clockworks](#)

3. Keep track of your score!
4. Choose **NEXT PROBLEM** to go on.



# Practice on your own: Time Practice!

Find a digital clock in your house.


1. Tell a grown-up the time what time your clock says.
2. Draw a picture of a clock showing a different time.
3. Show it to the grown-up and have them tell you the time.

**Practice:**  
Complete this page in your packet.


Name: \_\_\_\_\_

## Exit Ticket

Show the time from the analog clock on the digital clock.

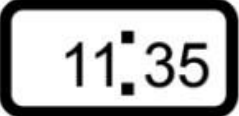


A circular analog clock with numbers 1 through 12. The hour hand is between 11 and 12, and the minute hand is pointing to 7.




A rectangular box with a colon in the center, intended for writing a digital time.

Show the time from the digital clock on the analog clock.



A rectangular box containing the digital time 11:35.



A blank circular analog clock with numbers 1 through 12 and a central dot.

## Self Check:

Go tell someone in your home your answers.



1. Was this lesson?

Just right 

okay 

hard 

2. Find a clock or watch in your house and tell someone what time it is.