



**Math Problem Solving Virtual Learning**

# **SPED Program**

**April 28, 2020**



# Sped Program Math Problem Solving

## Lesson: April 28, 2020

### **Learning Target:**

Students will use a ruler to measure to the nearest  $\frac{1}{4}$  Inch.

# Background: This is a review lesson

## Let's Get Started:

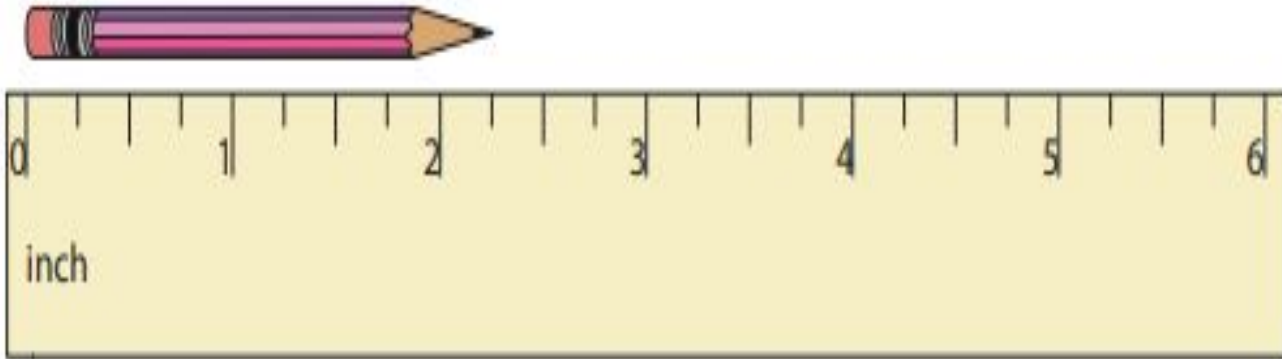
### Watch Videos:

1. [How do you measure to the nearest 1/4 inch](#)
2. [Measuring using a ruler to the nearest 1/4 Inch](#)

## Practice #1

How long is the pencil to the nearest quarter inch?

- a).  $1 \frac{1}{2}$  Inch      b).  $1 \frac{1}{4}$  Inch      c).  $2 \frac{1}{4}$  Inch



## Practice #1

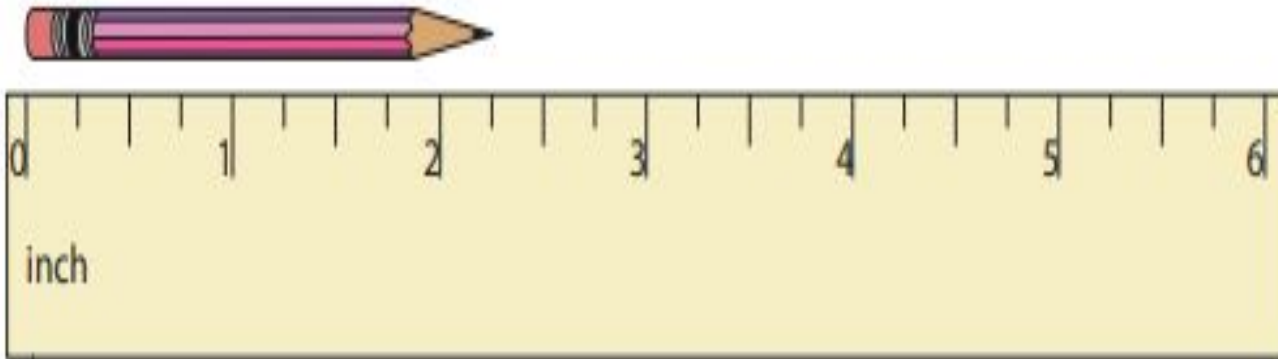
How long is the pencil to the nearest quarter inch?

a). 1  $\frac{1}{2}$  Inch

b). 1  $\frac{1}{4}$  Inch



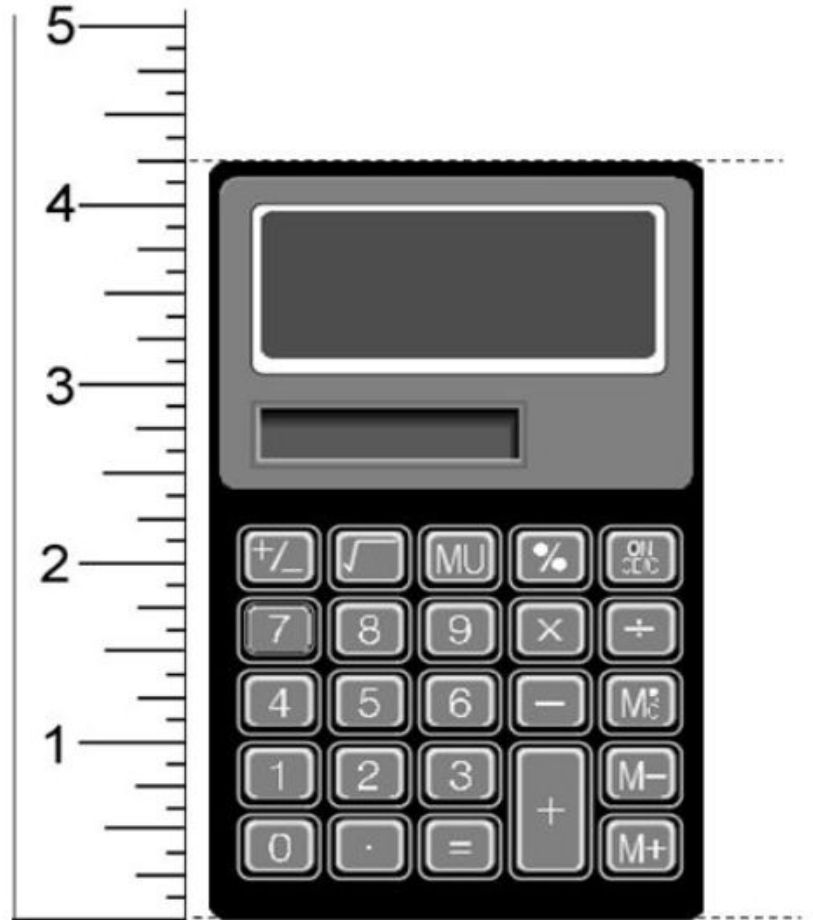
c). 2  $\frac{1}{4}$  Inch



## Practice #2


How high is the calculator to the nearest quarter inch?

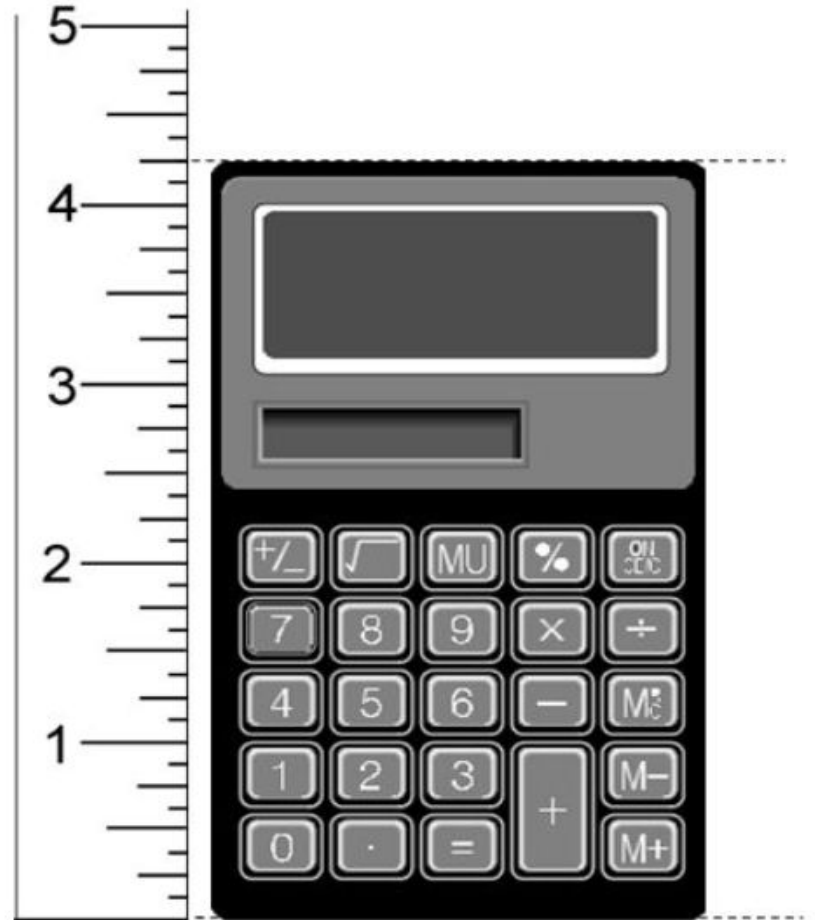
- a).  $4 \frac{1}{2}$  Inches
- b).  $4 \frac{3}{4}$  Inches
- c).  $4 \frac{1}{4}$  Inches



## Practice #2

How high is the calculator to the nearest quarter inch?

- a). 4  $\frac{1}{2}$  Inches
-  b). 4  $\frac{3}{4}$  Inches
- c). 4  $\frac{1}{4}$  Inches



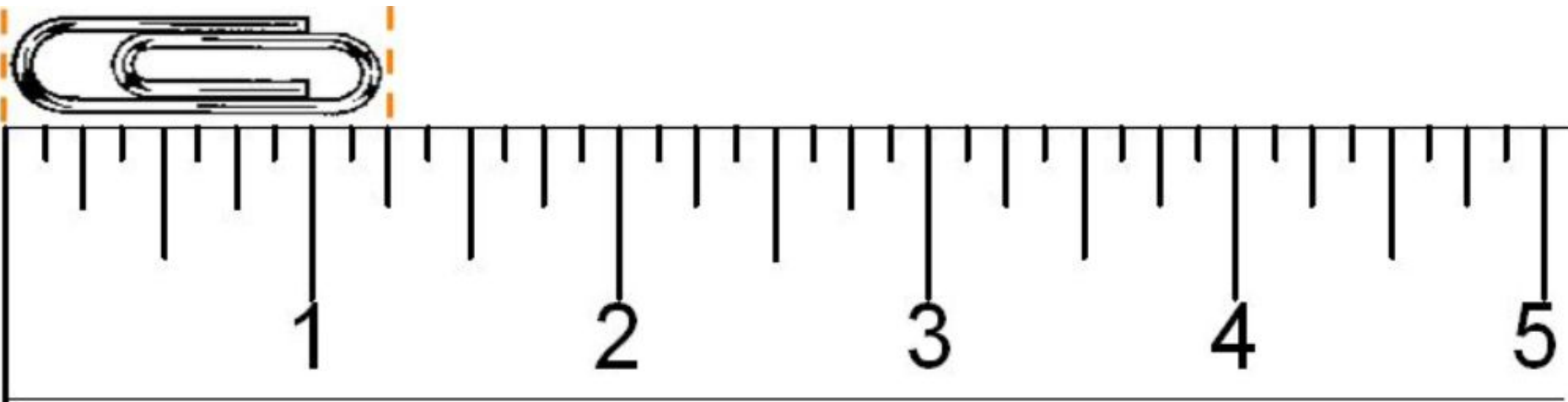
## Practice #3

How long is the paper clip to the nearest quarter inch?

a). 1  $\frac{1}{2}$  Inch

b). 1  $\frac{1}{4}$  inch

c). 1  $\frac{1}{8}$  inch





## Practice #3

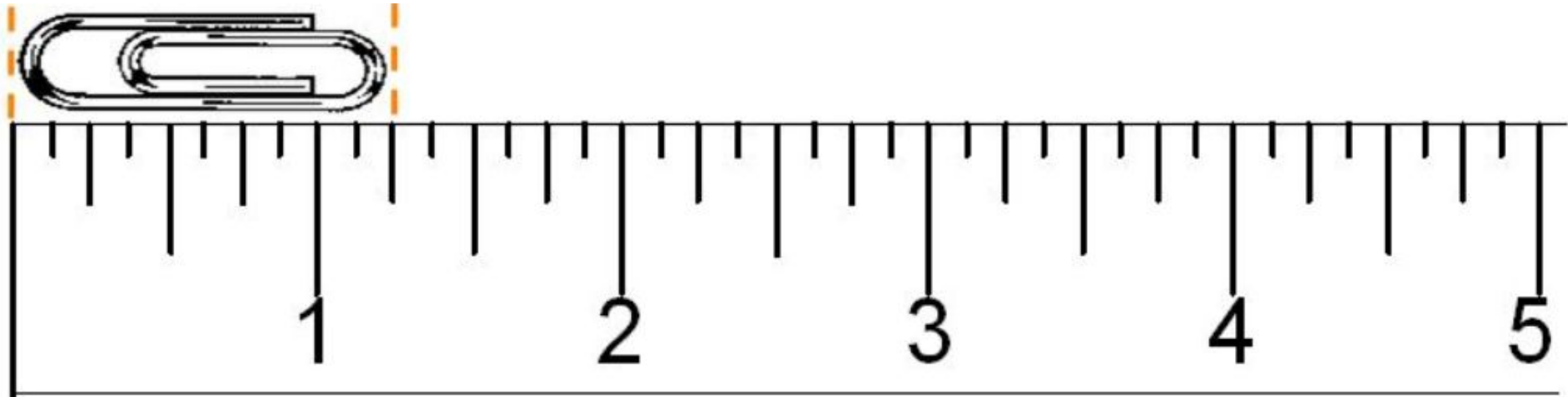
How long is the paper clip to the nearest quarter inch?

a). 1  $\frac{1}{2}$  Inch



b). 1  $\frac{1}{4}$  inch

c). 1  $\frac{1}{8}$  inch



Practice on your own:  
Go to this website:


What is the length of the red line in inches?

1. Select either computer or tablet.




2. Pick a measure (inches). Pick a level (easy, medium, hard). Play by picking the correct answer from the choices provided.

3. Ask an adult for help, if needed.



4. Great job!



Practice on your own:  
Go to this website:


[Measuring to the quarter nearest inch](#)

1. Select either computer or tablet.




2. Click play. Select Inches. Choose Quarter. Play the game by following directions.

3. Ask an adult for help, if needed.



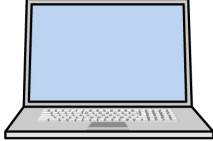


4. Great job!



## MORE Practice on your own:

Go to this website:

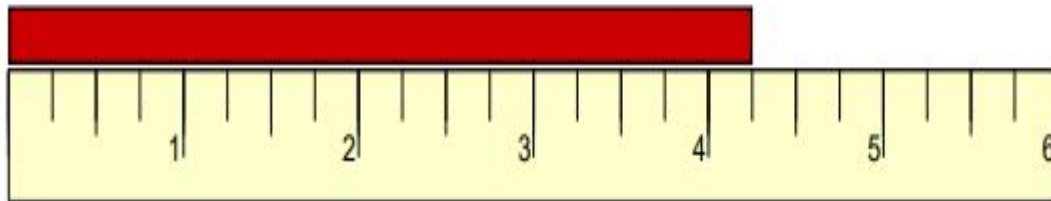
[Inches Ruler Game](#)

1. Select either computer or tablet. 
2. A ruler is provided. Click on the ruler the numbers provided. Follow the rest of the prompts.
3. Ask an adult for help, if needed.  
4. Great job!

## Practice:

Complete this page.

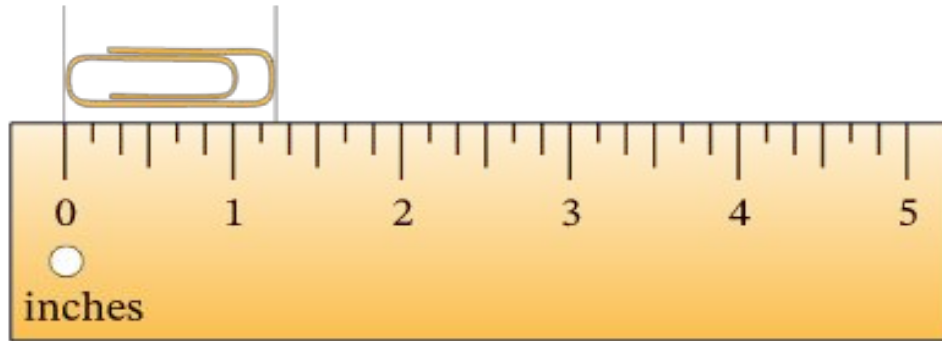
What is the measurement of the red bar to the nearest quarter inch?



\_\_\_\_\_

**Practice:  
Complete this page.**

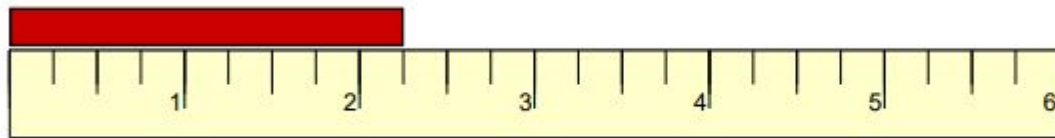
**How long is the paper clip to the nearest quarter inch?**



\_\_\_\_\_

**Practice: Complete this page.**

**What is the measurement of the red bar to the nearest quarter inch?**

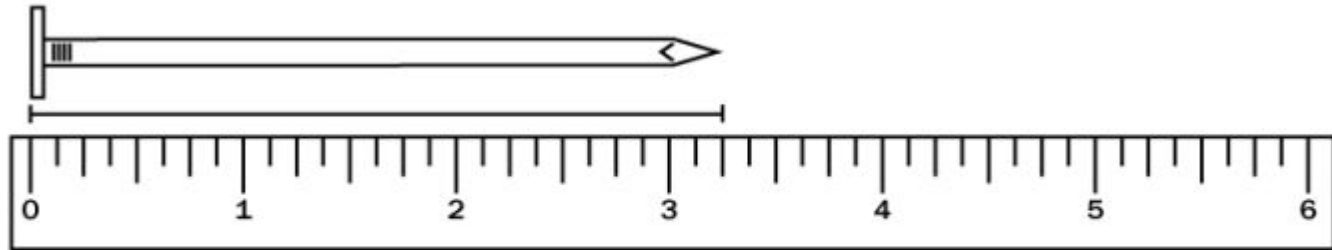


\_\_\_\_\_

\_\_\_\_\_

**Practice:**  
Complete this page.

**How long is the nail to the nearest quarter inch?**



---



## Self Check:

Go tell someone in your home your answers.



1. Was this lesson?

easy

just right

hard

2. Find items around your house and measure them!