

ISD
Special Education
FS, LS, CBSS 6-12
Week: May 4- May 8

Inspiring Greatness




INDEPENDENCE SCHOOL DISTRICT


Use this anchor chart to navigate the packet.

ELA	Page Number
Lesson 1	Pages 1-2
Lesson 2	Pages 3-4
Lesson 3	Pages 5-6
Lesson 4	Pages 7-8
Lesson 5	Pages 9-10
Lesson 6	Pages 11-12
Lesson 7	Pages 13-14
Lesson 8	Pages 15-16
Lesson 9	Pages 17-18
Lesson 10	Pages 19-20


Fill in the circle next to the correct spelling of the word:




☐ nest
☐ nost
☐ nist



☐ star
☐ stair
☐ stir



☐ swom
☐ swum
☐ swim



☐ stock
☐ stack
☐ stick

Write 5 words that start with
consonants:

Write 5 words that start with
vowels:

Write a sentence with a word that rhymes with cat.

Write a sentence with a word that rhymes with hop.

Write a sentence with a word that rhymes with dig.

Sort the words by number of syllables:

long**garbage****sea****kitten****phone****shower****shelf****hair****ringing****jar****basket****glasses****close****window****pencil****plant**

2 Syllables

1 Syllable

Write 4 sentences using a capital letter and a period:







- _____
- _____
- _____
- _____

Circle the word that rhymes:











band bracket bend sand	eye nose lie ears
loan loans lean moan	check deck cheek stack
lick laces chick socks	dig big dug sick

Write 2 words that rhyme:

Circle the number of syllables in each word:

 1 2 3 4	 1 2 3 4	 1 2 3 4
 1 2 3 4	 1 2 3 4	 1 2 3 4

Match the words that rhyme:

Write 5 short
I words:

Write 5 short
E words:

Follow the directions:

Write a word with 4 syllables: _____

Write a word with 3 syllables: _____

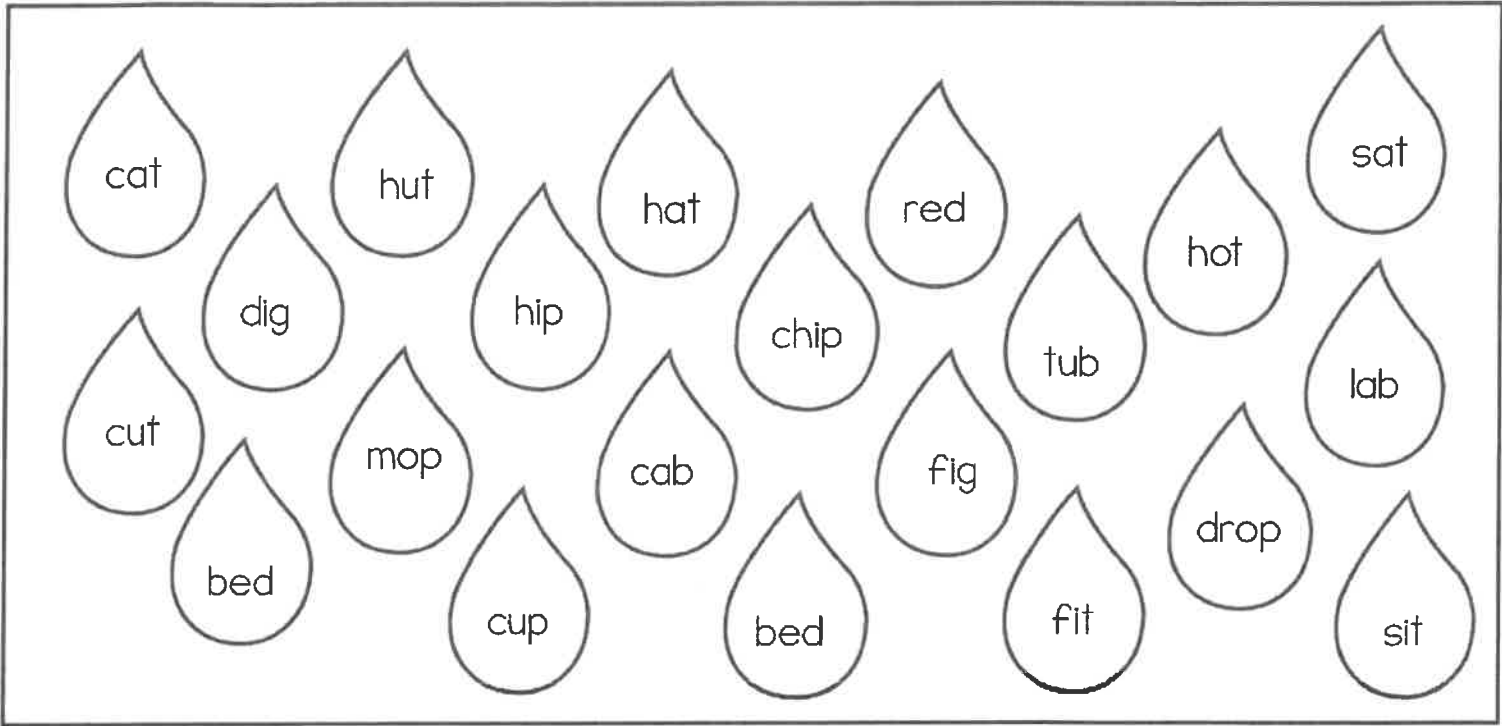
Write a word with 2 syllables: _____

Write a word with 1 syllable: _____

Write a word with 1 syllable: _____

Write 7 short
A words:

Color the short A words blue, the short E words yellow, the short I words green, the short O purple, and the short U words brown:

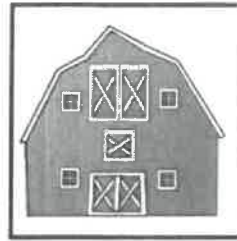


Complete the chart with short vowel words:


short A	short E	short I	short O	short U

Circle the correct answer:



Where do cows live?



Who cooks in a restaurant?



What animals lives underwater?



Fill in the missing vowel:



p__t



s__n



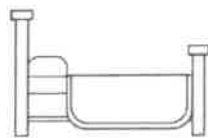
p__n



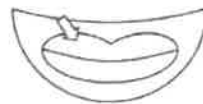
m__p



s__x



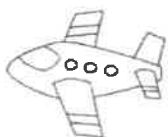
b__d



l__p




l__g



j__t



m__d



f__n



c__b

Write pairs of words that rhyme:

_____ and _____

_____ and _____

_____ and _____

_____ and _____

Write 10
words with
short I:

Sort the words by number of syllables:

sunglasses

Halloween

paper

eleven

toothpaste

sorry

carpet

sailboat

listening

over

afternoon

grandmother

jacket

celery

important

telephone

2 Syllables

3 Syllables

Write 8 short I words:

Write 8 short U words:

Match the rhyming words:

land	plane
head	crack
tea	sad
train	dig
bone	cake
nail	bed
rake	cone
tack	sail
mad	bee
pig	hand

Follow the directions:

Write a word with 2 syllables that starts with M: _____

Write a word with 3 syllables that starts with S: _____

Write a word with 1 syllable that starts with T: _____

Write a word with 2 syllables that starts with P: _____

Write a word with 3 syllables that starts with Y: _____

Use this anchor chart to navigate the packet.

MATH	Page Number
Lesson 1	Pages 1-2
Lesson 2	Pages 3-4
Lesson 3	Pages 5-6
Lesson 4	Pages 7-8
Lesson 5	Pages 9-10
Lesson 6	Pages 11-12
Lesson 7	Pages 13-14
Lesson 8	Pages 15-16
Lesson 9	Pages 17-18
Lesson 10	Pages 19-20

Color the math facts that equal **8** yellow.

Color the math facts that equal **5** purple.

Color the math facts that equal **3** green:

$2+3$

$1+2$

$1+4$

$2+1$

$5+3$

$0+3$

$3+2$

$1+7$

$4+4$

How many?

Write if each number is odd or even:

||||| _____

|||| _____

||||| _____

|| _____

||||| _____

11 _____

13 _____

20 _____

5 _____

6 _____

12 _____

Write true if the problem is correct
and false if the problem is incorrect:

$$10 + 10 = 19 \quad \underline{\hspace{2cm}}$$

$$6 + 6 = 12 \quad \underline{\hspace{2cm}}$$

$$4 + 10 = 15 \quad \underline{\hspace{2cm}}$$

Match the clock to the time:



12:00



6:00



7:00




4:00



1:00

Write the time
each clock says:











Write the number words:

16 _____

18 _____

Count by 2s and fill in the missing numbers:

2	4			10		
---	---	--	--	----	--	--

22		26	28		32	
----	--	----	----	--	----	--

Complete the addition problems:

$$\begin{array}{r} 8 \\ + \\ 10 \\ \hline \end{array}$$

$$\begin{array}{r} 0 \\ + \\ 10 \\ \hline \end{array}$$

$$\begin{array}{r} 10 \\ + \\ 6 \\ \hline \end{array}$$

$$\begin{array}{r} 7 \\ + \\ 5 \\ \hline \end{array}$$

$$\begin{array}{r} 6 \\ + \\ 4 \\ \hline \end{array}$$

$$\begin{array}{r} 10 \\ + \\ 10 \\ \hline \end{array}$$

$$\begin{array}{r} 10 \\ + \\ 4 \\ \hline \end{array}$$

$$\begin{array}{r} 10 \\ + \\ 3 \\ \hline \end{array}$$



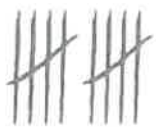


$$\begin{array}{r} 10 \\ + \\ 5 \\ \hline \end{array}$$

$$\begin{array}{r} 0 \\ + \\ 0 \\ \hline \end{array}$$

$$\begin{array}{r} 6 \\ + \\ 10 \\ \hline \end{array}$$

$$\begin{array}{r} 8 \\ + \\ 5 \\ \hline \end{array}$$

Match the tallies to the amount:

	9
	6
	4
	5
	10

Write the number words:

2 _____

15 _____

17 _____

11 _____

6 _____

20 _____

Count by 2s:

8, 10, _____, _____, _____, _____, _____

Complete the addition problems:


$6 + 4 = \underline{\quad}$ $5 + 7 = \underline{\quad}$ $2 + 10 = \underline{\quad}$

$6 + 8 = \underline{\quad}$ $3 + 10 = \underline{\quad}$ $5 + 0 = \underline{\quad}$

$5 + 10 = \underline{\quad}$ $2 + 7 = \underline{\quad}$ $5 + 4 = \underline{\quad}$

Circle all of the nickels:

Write which coin goes with each value:



5¢ _____

25¢ _____

1¢ _____

10¢ _____

5¢ _____

Count the tallies and circle the correct amount:

	1	10
	9	19
	17	18
	20	13
	16	12

Write the tallies for each number:

14 _____

7 _____

8 _____

Write the number words:

2 _____

15 _____

11 _____

6 _____

20 _____

Complete the addition problems:

$$\begin{array}{r} 10 \\ + 8 \\ \hline \end{array}$$

$$\begin{array}{r} 2 \\ + 6 \\ \hline \end{array}$$

$$\begin{array}{r} 5 \\ + 10 \\ \hline \end{array}$$

$$\begin{array}{r} 8 \\ + 6 \\ \hline \end{array}$$

$$\begin{array}{r} 5 \\ + 3 \\ \hline \end{array}$$

$$\begin{array}{r} 10 \\ + 7 \\ \hline \end{array}$$

$$\begin{array}{r} 3 \\ + 8 \\ \hline \end{array}$$

$$\begin{array}{r} 2 \\ + 10 \\ \hline \end{array}$$

$$\begin{array}{r} 10 \\ + 10 \\ \hline \end{array}$$

$$\begin{array}{r} 10 \\ + 6 \\ \hline \end{array}$$

$$\begin{array}{r} 7 \\ + 10 \\ \hline \end{array}$$

$$\begin{array}{r} 8 \\ + 3 \\ \hline \end{array}$$

Count by 2s and fill in the missing numbers:

	8	10		14	16	
--	---	----	--	----	----	--

14	16		20	22		26
----	----	--	----	----	--	----

Complete the addition problems:

$10 + 7 = \underline{\quad\quad}$ $3 + 6 = \underline{\quad\quad}$ $10 + 10 = \underline{\quad\quad}$

$9 + 3 = \underline{\quad\quad}$ $5 + 10 = \underline{\quad\quad}$ $2 + 10 = \underline{\quad\quad}$

$7 + 10 = \underline{\quad\quad}$ $6 + 3 = \underline{\quad\quad}$ $10 + 8 = \underline{\quad\quad}$

Circle all of the dimes:



Write numbers that are odd:

Fill in the number that comes next
when counting by 2s.

16, 18, 20, _____

20, 22, 24, _____

8, 10, 12, _____

2, 4, 6, _____

Write the name of each coin:

coin	coin name
	
	
	
	

Color the math facts that equal **7** yellow.

Color the math facts that equal **4** purple.

Color the math facts that equal **9** green:

$$3+1$$

$$2+2$$

$$3+6$$

$$2+5$$

$$6+1$$

$$1+8$$

$$7+2$$

$$4+0$$

$$3+4$$