


ISD
Special Education
FS, LS, CBSS K-5th
Week: May 18 – May 22

Inspiring Greatness




INDEPENDENCE SCHOOL DISTRICT


Use this anchor chart to navigate the packet.

ELA	Page Number
Lesson 1	Pages 1-2
Lesson 2	Pages 3-4
Lesson 3	Pages 5-6
Lesson 4	Pages 7-8
Lesson 5	Pages 9-10
Lesson 6	Pages 11-12
Lesson 7	Pages 13-14
Lesson 8	Pages 15-16
Lesson 9	Pages 17-18
Lesson 10	Pages 19-20


Fill in the circle next to the correct spelling of the word:




☐ nest
☐ nost
☐ nist



☐ star
☐ stair
☐ stir



☐ swom
☐ swum
☐ swim



☐ stock
☐ stack
☐ stick

Write 5 words that start with
consonants:

Write 5 words that start with
vowels:

Write a sentence with a word that rhymes with cat.

Write a sentence with a word that rhymes with hop.

Write a sentence with a word that rhymes with dig.

Sort the words by number of syllables:

long**garbage****sea****kitten****phone****shower****shelf****hair****ringing****jar****basket****glasses****close****window****pencil****plant**

2 Syllables

1 Syllable

Write 4 sentences using a capital letter and a period:

- _____
- _____
- _____
- _____

Circle the word that rhymes:

band

bracket bend sand

eye

nose lie ears

loan

loans lean moan

check

deck cheek stack

lick

laces chick socks

dig

big dug sick

Write 2 words that rhyme:

Circle the number of syllables in each word:



1 2 3 4




1 2 3 4



1 2 3 4



1 2 3 4







1 2 3 4



1 2 3 4

Match the words that rhyme:

Write 5 short
I words:

Write 5 short
E words:

Follow the directions:

Write a word with 4 syllables: _____

Write a word with 3 syllables: _____

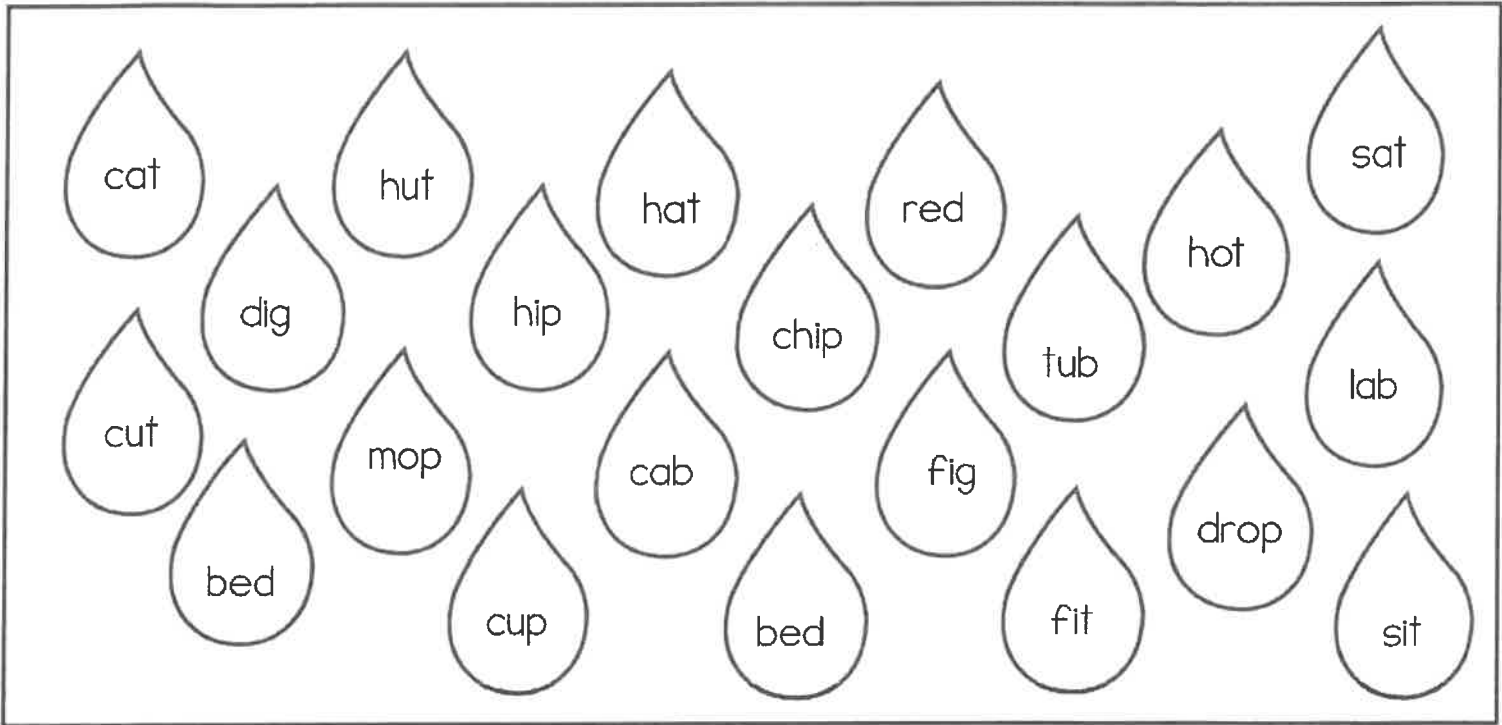
Write a word with 2 syllables: _____

Write a word with 1 syllable: _____

Write a word with 1 syllable: _____

Write 7 short
A words:

Color the short A words blue, the short E words yellow, the short I words green, the short O purple, and the short U words brown:

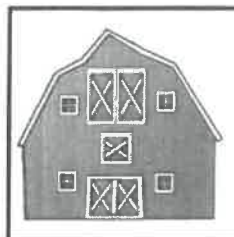


Complete the chart with short vowel words:

short A	short E	short I	short O	short U

Circle the correct answer:



Where do cows live?



Who cooks in a restaurant?



What animals lives underwater?



Fill in the missing vowel:



p__t



s__n



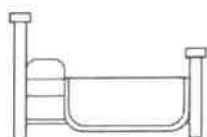
p__n



m__p



s__x



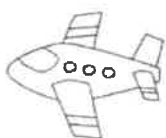
b__d



l__p




l__g



j__t



m__d



f__n



c__b

Write pairs of words that rhyme:

_____ and _____

_____ and _____

_____ and _____

_____ and _____

Write 10
words with
short I:

Sort the words by number of syllables:

sunglasses**Halloween****paper****eleven****toothpaste****sorry****carpet****sailboat****listening****over****afternoon****grandmother****jacket****celery****important****telephone**

2 Syllables

3 Syllables

Write 8 short I words:

Write 8 short U words:

Match the rhyming words:

land

plane

head

crack

tea

sad

train

dig

bone

cake

nail

bed

rake

cone

tack

sail

mad

bee

pig

hand

Follow the directions:

Write a word with 2 syllables that starts with M: _____

Write a word with 3 syllables that starts with S: _____

Write a word with 1 syllable that starts with T: _____

Write a word with 2 syllables that starts with P: _____

Write a word with 3 syllables that starts with Y: _____

Write the number of syllables in each word:

Word	How many syllables?	Word	How many syllables?
when		keys	
pressure		going	
tell		rest	
wedding		night	
blue		pizza	
purple		cantelope	
away		sheets	
river		teeth	
elephant		baby	
penguin		fine	

Answer the questions:



Where is the cat? _____


What is the cat doing? _____




Where is the boy? _____

What is he doing? _____

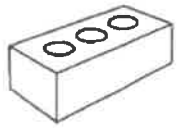
Fill in the circle next to the correct spelling of the word:




☐ drop
☐ drope
☐ droop



☐ frug
☐ frig
☐ frog



☐ bruck
☐ brick
☐ brack





☐ crab
☐ crub
☐ crabe

Write 5 short
U words:

Match the words that rhyme:

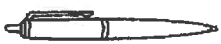
Write 5 short
O words:

























Complete the chart with words that rhyme:

car	look	house	cry
cat	big	rock	net

Circle all of the vowels:

B D F Y T A O L G H
 I R E A Q W F L M N
 O Y R A Q T B V Y L
 M I E X T Y A S D
 W E T P E C F T Y A
 E M L M W A G R O
 S W F A R T O A P W
 T A F E Q X B A N A

Write 8 words with a short I:

Write a complete sentence about the picture:



Follow the directions:

Write a word with 3 syllables that starts with W: _____

Write a word with 1 syllable that starts with L: _____

Write a word with 1 syllable that starts with R: _____

Write a word with 2 syllables that starts with C: _____

Write a word with 3 syllables that starts with B: _____

Answer the questions:

1. Who works in a school?

2. Where do you eat dinner?

3. Who works at a restaurant?

4. Who brings the mail?

5. What do you do in a pool?

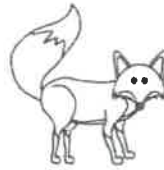
Fill in the missing vowel:



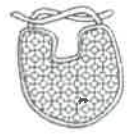
w__g



l__g



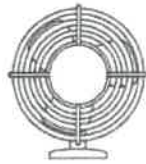
f__x



b__b



w__b



f__n



t__x



c__p

Circle the vowels in each word:

jealous

car

street

event

begin

excited

summer

wanted

Circle the word that rhymes:

well

tall sell balloon

bake

cheek pie make

duck

dice deck truck

can

fan jar cans

boat

beets ship coat

dry

bye cry dried

Complete the chart with short vowel words:

short A	short E	short I	short O	short U

Sort the words by number of syllables:

anyway

butterfly

December

watermelon

avocado

dictionary

independent

motorcycle

February

telephone

underwater

misunderstood

triangle

potato

elephant

altogether

3 Syllables

4 Syllables

Use this anchor chart to navigate the packet.

MATH	Page Number
Lesson 1	Pages 1-2
Lesson 2	Pages 3-4
Lesson 3	Pages 5-6
Lesson 4	Pages 7-8
Lesson 5	Pages 9-10
Lesson 6	Pages 11-12
Lesson 7	Pages 13-14
Lesson 8	Pages 15-16
Lesson 9	Pages 17-18
Lesson 10	Pages 19-20

Color the math facts that equal **8** yellow.

Color the math facts that equal **5** purple.

Color the math facts that equal **3** green:

$2+3$

$1+2$

$1+4$

$2+1$

$5+3$

$0+3$

$3+2$

$1+7$

$4+4$

How many?

Write if each number is odd or even:

||||| _____

|||| _____

||||| _____

|| _____

||||| _____

11 _____

13 _____

20 _____

5 _____

6 _____

12 _____

Write true if the problem is correct
and false if the problem is incorrect:

$$10 + 10 = 19 \quad \underline{\hspace{2cm}}$$

$$6 + 6 = 12 \quad \underline{\hspace{2cm}}$$

$$4 + 10 = 15 \quad \underline{\hspace{2cm}}$$

Match the clock to the time:



12:00



6:00



7:00



4:00



1:00

Write the time
each clock says:











Write the number words:

16 _____

18 _____

Count by 2s and fill in the missing numbers:

2	4			10		
---	---	--	--	----	--	--

22		26	28		32	
----	--	----	----	--	----	--

Complete the addition problems:

$$\begin{array}{r} 8 \\ + 10 \\ \hline \end{array}$$

$$\begin{array}{r} 0 \\ + 10 \\ \hline \end{array}$$

$$\begin{array}{r} 10 \\ + 6 \\ \hline \end{array}$$

$$\begin{array}{r} 7 \\ + 5 \\ \hline \end{array}$$

$$\begin{array}{r} 6 \\ + 4 \\ \hline \end{array}$$

$$\begin{array}{r} 10 \\ + 10 \\ \hline \end{array}$$

$$\begin{array}{r} 10 \\ + 4 \\ \hline \end{array}$$

$$\begin{array}{r} 10 \\ + 3 \\ \hline \end{array}$$



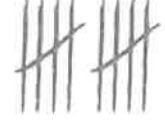


$$\begin{array}{r} 10 \\ + 5 \\ \hline \end{array}$$

$$\begin{array}{r} 0 \\ + 0 \\ \hline \end{array}$$

$$\begin{array}{r} 6 \\ + 10 \\ \hline \end{array}$$

$$\begin{array}{r} 8 \\ + 5 \\ \hline \end{array}$$

Match the tallies to the amount:

	9
	6
	4
	5
	10

Write the number words:

2 _____

15 _____

17 _____

11 _____

6 _____

20 _____

Count by 2s:

8, 10, _____, _____, _____, _____, _____

Complete the addition problems:


$6 + 4 = \underline{\quad}$ $5 + 7 = \underline{\quad}$ $2 + 10 = \underline{\quad}$

$6 + 8 = \underline{\quad}$ $3 + 10 = \underline{\quad}$ $5 + 0 = \underline{\quad}$

$5 + 10 = \underline{\quad}$ $2 + 7 = \underline{\quad}$ $5 + 4 = \underline{\quad}$

Circle all of the nickels:

Write which coin goes with each value:



5¢ _____

25¢ _____

1¢ _____

10¢ _____

5¢ _____

Count the tallies and circle the correct amount:

	1	10
	9	19
	17	18
	20	13
	16	12

Write the tallies for each number:

14 _____

7 _____

8 _____

Write the number words:

2 _____

15 _____

11 _____

6 _____

20 _____

Complete the addition problems:

$$\begin{array}{r} 10 \\ + 8 \\ \hline \end{array}$$

$$\begin{array}{r} 2 \\ + 6 \\ \hline \end{array}$$

$$\begin{array}{r} 5 \\ + 10 \\ \hline \end{array}$$

$$\begin{array}{r} 8 \\ + 6 \\ \hline \end{array}$$

$$\begin{array}{r} 5 \\ + 3 \\ \hline \end{array}$$

$$\begin{array}{r} 10 \\ + 7 \\ \hline \end{array}$$

$$\begin{array}{r} 3 \\ + 8 \\ \hline \end{array}$$

$$\begin{array}{r} 2 \\ + 10 \\ \hline \end{array}$$

$$\begin{array}{r} 10 \\ + 10 \\ \hline \end{array}$$

$$\begin{array}{r} 10 \\ + 6 \\ \hline \end{array}$$

$$\begin{array}{r} 7 \\ + 10 \\ \hline \end{array}$$

$$\begin{array}{r} 8 \\ + 3 \\ \hline \end{array}$$

Count by 2s and fill in the missing numbers:

	8	10		14	16	
--	---	----	--	----	----	--

14	16		20	22		26
----	----	--	----	----	--	----

Complete the addition problems:

$10 + 7 = \underline{\quad\quad}$ $3 + 6 = \underline{\quad\quad}$ $10 + 10 = \underline{\quad\quad}$

$9 + 3 = \underline{\quad\quad}$ $5 + 10 = \underline{\quad\quad}$ $2 + 10 = \underline{\quad\quad}$

$7 + 10 = \underline{\quad\quad}$ $6 + 3 = \underline{\quad\quad}$ $10 + 8 = \underline{\quad\quad}$

Circle all of the dimes:



Write numbers that are odd:

Fill in the number that comes next
when counting by 2s.





16, 18, 20, _____

20, 22, 24, _____

8, 10, 12, _____

2, 4, 6, _____

Write the name of each coin:

coin	coin name
	
	
	
	

Color the math facts that equal **7** yellow.
Color the math facts that equal **4** purple.
Color the math facts that equal **9** green:

$$3+1$$

$$2+2$$

$$3+6$$

$$2+5$$

$$6+1$$






$$1+8$$

$$7+2$$

$$4+0$$

$$3+4$$

Count the tallies and circle the correct amount:

	19	20
	11	14
	18	14
	16	15
	12	13

Write true if the problem is correct and false if the problem is incorrect:

$$1 + 10 = 11 \quad \underline{\hspace{2cm}}$$

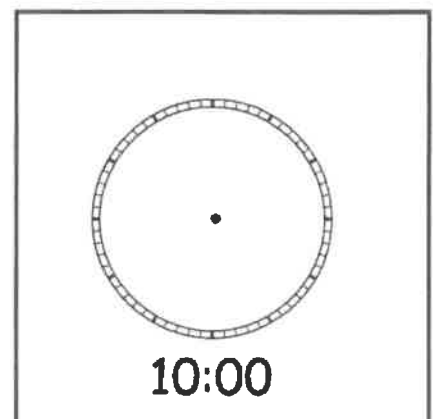
$$10 + 6 = 15 \quad \underline{\hspace{2cm}}$$

$$7 + 10 = 18 \quad \underline{\hspace{2cm}}$$

Circle all of the odd numbers:

3 2 9 17
20 21 16 15
14 10 11 2
7 4 6 8 9
2 3 4 3 1
2 7 9 12
14 16 18 2
15 6 8 9
9 11 1 7 17
18 19 20 2

Draw the hands on the clock to make the time:



Complete the addition problems:

$$\begin{array}{r} 9 \\ + 10 \\ \hline \end{array}$$

$$\begin{array}{r} 3 \\ + 10 \\ \hline \end{array}$$

$$\begin{array}{r} 6 \\ + 6 \\ \hline \end{array}$$

$$\begin{array}{r} 10 \\ + 7 \\ \hline \end{array}$$

$$\begin{array}{r} 8 \\ + 10 \\ \hline \end{array}$$

$$\begin{array}{r} 4 \\ + 9 \\ \hline \end{array}$$

$$\begin{array}{r} 6 \\ + 10 \\ \hline \end{array}$$

$$\begin{array}{r} 10 \\ + 4 \\ \hline \end{array}$$

$$\begin{array}{r} 9 \\ + 3 \\ \hline \end{array}$$

$$\begin{array}{r} 10 \\ + 10 \\ \hline \end{array}$$

$$\begin{array}{r} 5 \\ + 0 \\ \hline \end{array}$$

$$\begin{array}{r} 10 \\ + 5 \\ \hline \end{array}$$

How many?

 _____

 _____

 _____

 _____

Match the clock to the time:



4:00



5:00



7:00

Write the tallies for each number:

Match the problem to the answer:

$10 + 9 =$

6

$10 + 10 =$

13

$9 + 4 =$

19

$3 + 3 =$

13

$6 + 7 =$

11

$5 + 6 =$

20

9 _____

13 _____

2 _____

5 _____

15 _____

Complete the addition problems:

$10 + 5 = \underline{\quad\quad\quad}$ $8 + 4 = \underline{\quad\quad\quad}$ $2 + 10 = \underline{\quad\quad\quad}$

$6 + 10 = \underline{\quad\quad\quad}$ $10 + 10 = \underline{\quad\quad\quad}$ $3 + 5 = \underline{\quad\quad\quad}$

$2 + 5 = \underline{\quad\quad\quad}$ $6 + 10 = \underline{\quad\quad\quad}$ $7 + 8 = \underline{\quad\quad\quad}$

Complete the addition problems:

$$\begin{array}{r} 10 \\ + \\ 8 \\ \hline \end{array}$$

$$\begin{array}{r} 2 \\ + \\ 1 \\ \hline \end{array}$$

$$\begin{array}{r} 6 \\ + \\ 10 \\ \hline \end{array}$$

$$\begin{array}{r} 10 \\ + \\ 8 \\ \hline \end{array}$$

$$\begin{array}{r} 3 \\ + \\ 6 \\ \hline \end{array}$$

$$\begin{array}{r} 5 \\ + \\ 10 \\ \hline \end{array}$$

$$\begin{array}{r} 10 \\ + \\ 10 \\ \hline \end{array}$$

$$\begin{array}{r} 3 \\ + \\ 10 \\ \hline \end{array}$$

Count by 2s:

12, 14, _____, _____, _____, _____, _____

Color the math facts that equal **3** yellow.Color the math facts that equal **5** purple.Color the math facts that equal **7** green:

$$1+2$$

$$3+0$$

$$3+4$$

$$3+2$$

$$2+1$$

$$2+3$$

$$6+1$$

$$4+1$$

$$5+2$$

Circle the correct number word
for each number:

20	twenty	fourteen	fifteen
11	twelve	eleven	six
12	fifteen	thirteen	twelve
5	seven	five	six
7	nine	eight	seven
9	twenty	nine	ten
15	seventeen	fifteen	sixteen

Count the tallies and circle the
correct amount:

	19	11
	11	19
	17	18
	18	17
	15	10

Write the name of each coin:



Match the clock to the time:

	11:00
	10:00
	8:00
	2:00
	5:00

Write the time each clock says:





Complete the addition problems:

$10 + 2 = \underline{\quad\quad}$ $6 + 3 = \underline{\quad\quad}$ $2 + 10 = \underline{\quad\quad}$

$3 + 8 = \underline{\quad\quad}$ $4 + 10 = \underline{\quad\quad}$ $2 + 7 = \underline{\quad\quad}$

$8 + 10 = \underline{\quad\quad}$ $5 + 9 = \underline{\quad\quad}$ $8 + 10 = \underline{\quad\quad}$

Write the tallies for each number:

8

1

5

11

Match the problem to the answer:

$3 + 10 =$

9

$7 + 9 =$

14

$10 + 4 =$

7

$5 + 10 =$

16

$7 + 2 =$

15

$6 + 1 =$

13